

CANDIDATE  
NAME

--

CENTRE  
NUMBER

--	--	--	--	--

CANDIDATE  
NUMBER

--	--	--	--

**GEOGRAPHY**

**2217/22**

Paper 2

**May/June 2018**

**2 hours 15 minutes**

Candidates answer on the Question Paper.

Additional Materials:     Ruler  
                                  Calculator  
                                  Protractor  
                                  Plain paper

1:50 000 Survey Map Extract is enclosed with this question paper.

**READ THESE INSTRUCTIONS FIRST**

Write your Centre number, candidate number and name in the spaces provided.  
Write in dark blue or black pen.  
You may use an HB pencil for any diagrams or graphs.  
Do not use staples, paper clips, glue or correction fluid.  
**DO NOT WRITE IN ANY BARCODES.**

Write your answer to each question in the space provided. If additional space is required, you should use the lined pages at the end of the booklet. The question number(s) must be clearly shown.

**Section A**

Answer **all** questions.

**Section B**

Answer **one** question.

The Insert contains Figs 3.1 and 3.2 for Question 3, Tables 7.1, 7.2 and 7.3 and Fig. 7.4 for Question 7, and Table 8.2 for Question 8.

The Survey Map Extract and the Insert are **not** required by the Examiner.

Sketch maps and diagrams should be drawn whenever they serve to illustrate an answer.

At the end of the examination, fasten all your work securely together.

The number of marks is given in brackets [ ] at the end of each question or part question.

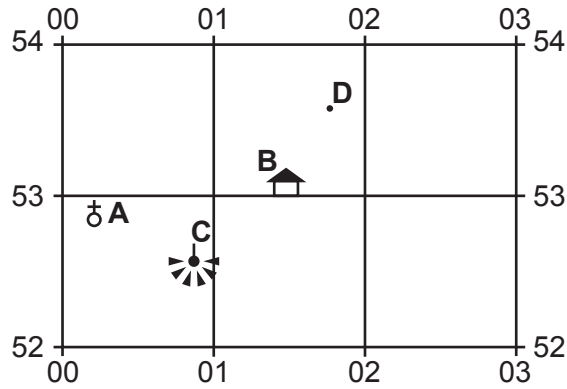
This document consists of **29** printed pages, **3** blank pages and **1** Insert.

**Section A**

Answer **all** questions in this section.

**1** Study the map extract of Vienenburg, Germany. The scale is 1:50 000.

**(a)** Fig. 1.1 shows some of the features in the south west part of the map extract.



**Fig. 1.1**

Using the map extract, identify the following features shown on Fig. 1.1:

**(i)** feature **A**;

.....[1]

**(ii)** feature **B**;

.....[1]

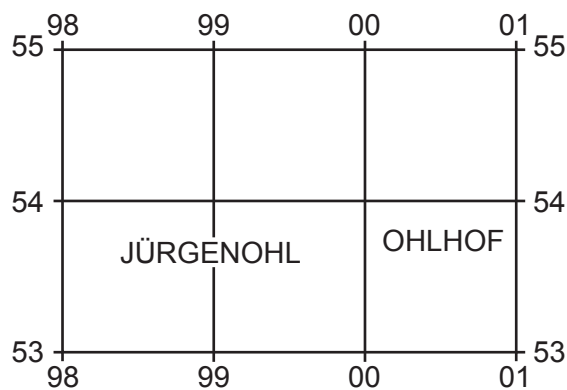
**(iii)** feature **C**;

.....[1]

**(iv)** the height at **D**.

.....[1]

**(b)** Fig. 1.2 shows the districts of Jürgenohl and Ohlhof.



**Fig. 1.2**

Using the map extract, compare the routes in these districts and complete the table. Place **one** tick in each row. The first row has been completed for you.

	Jürgenohl	Ohlhof	Both	Neither
Tourist route	✓			
Dual carriageway				
Parallel roads (grid pattern)				
Railway				

[3]

(c) (i) Describe how the direction of flow of the Oker river changes from 022520 to 080575.

.....  
 .....  
 ..... [2]

(ii) Identify **three** other physical features of the Oker river shown on the map.

.....  
 .....  
 .....  
 .....  
 .....  
 ..... [3]

(d) (i) What is the six-figure grid reference of the point where dual carriageway 6 crosses the Oker river? Tick (✓) **one** grid reference only.

027543	
027544	
543027	
543028	
544027	

[2]

(ii) Give the distance along the Oker river from the bridge on the dual carriageway 6 to the bridge on the main road 241. Give your answer in metres.

..... [1]

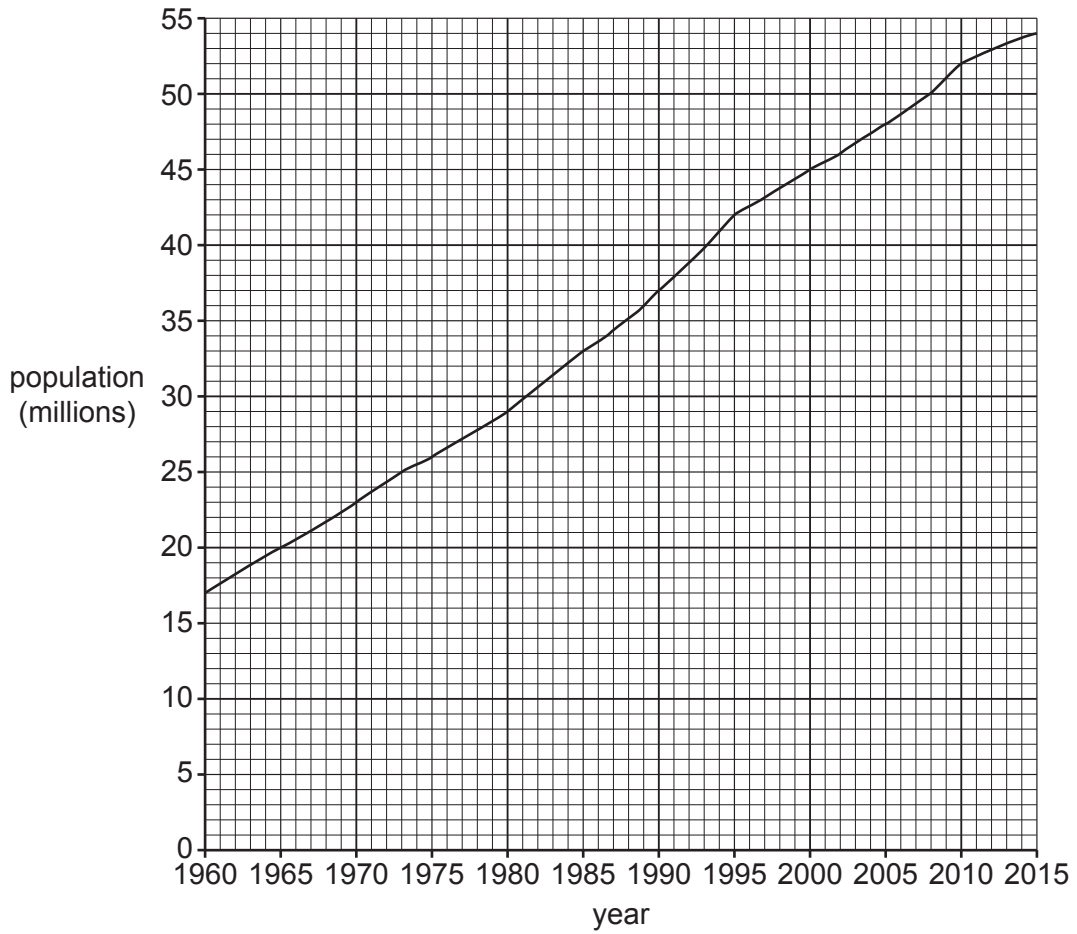
(e) Identify the land use on the flood plain of the Oker river.

.....  
.....  
.....  
.....  
.....  
.....  
.....  
.....  
.....  
.....  
.....  
.....

..... [5]

[Total: 20 marks]

2 Study Fig. 2.1, which shows the population of South Africa between 1960 and 2015.



**Fig. 2.1**

(a) Describe the trend shown on Fig. 2.1. Use data in your answer.

.....  
.....  
.....  
.....  
.....  
.....  
..... [3]

- (b) Study Table 2.1, which shows average population statistics for South Africa from 2010 to 2015.

**Table 2.1**

South Africa	per 1000 people
Birth Rate	21.0
Death Rate	12.5
Net Migration	+2.3

Use this information to calculate the overall population growth rate per 1000 people. Show how you worked out your answer.

..... per 1000 people

[2]

- (c) If birth rate stays the same, how would an increase in cases of HIV/AIDS change the following population indicators in a country. **Circle one** correct answer in each line.

<b>Death Rate</b>	Decrease	Increase	Stay the same
<b>Life Expectancy</b>	Decrease	Increase	Stay the same
<b>Natural Population Growth</b>	Decrease	Increase	Stay the same

[3]

[Total: 8 marks]

3 Study Fig. 3.1 (Insert), a photograph showing part of the city of Miami, USA.

(a) (i) Which land use zone is shown in Fig. 3.1?

.....[1]

(ii) Describe the buildings shown in Fig. 3.1.

.....  
.....  
.....  
.....  
.....  
.....  
.....  
.....  
.....  
.....  
.....  
.....[5]

(b) (i) Study Fig. 3.2 (Insert), a photograph showing the same land use zone in the city of Hangzhou, China. Give **one** difference between the buildings shown in Fig. 3.2 and those shown in Fig. 3.1.

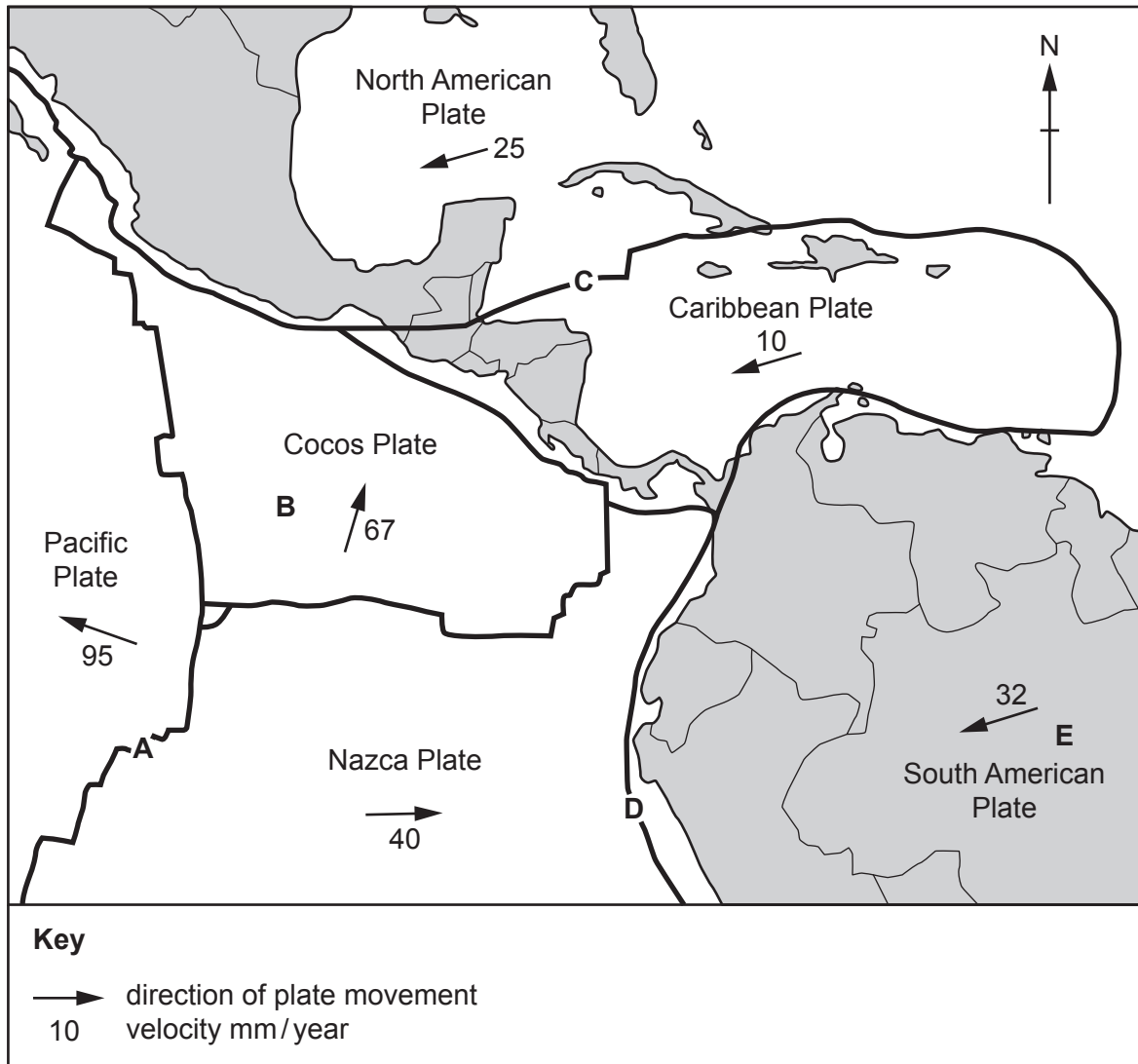
.....  
.....  
.....  
.....[1]

(ii) How has the environment been made more attractive in Fig. 3.2?

.....  
.....[1]

[Total: 8 marks]

4 Study Fig. 4.1, which shows some of the Earth's tectonic plates and locations **A**, **B**, **C**, **D** and **E**.



**Fig. 4.1**

(a) For each of the statements below, write the letter for the correct location. Choose from **A**, **B**, **C**, **D** or **E**:

The plates are converging; .....

The plates are diverging; .....

A conservative boundary. ....

[3]

(b) Describe the movement of the Nazca plate.

.....

.....

.....

..... [2]



(c) Why do earthquakes occur at **C** but not at **E**?

.....

.....

.....

.....

.....

.....

.....

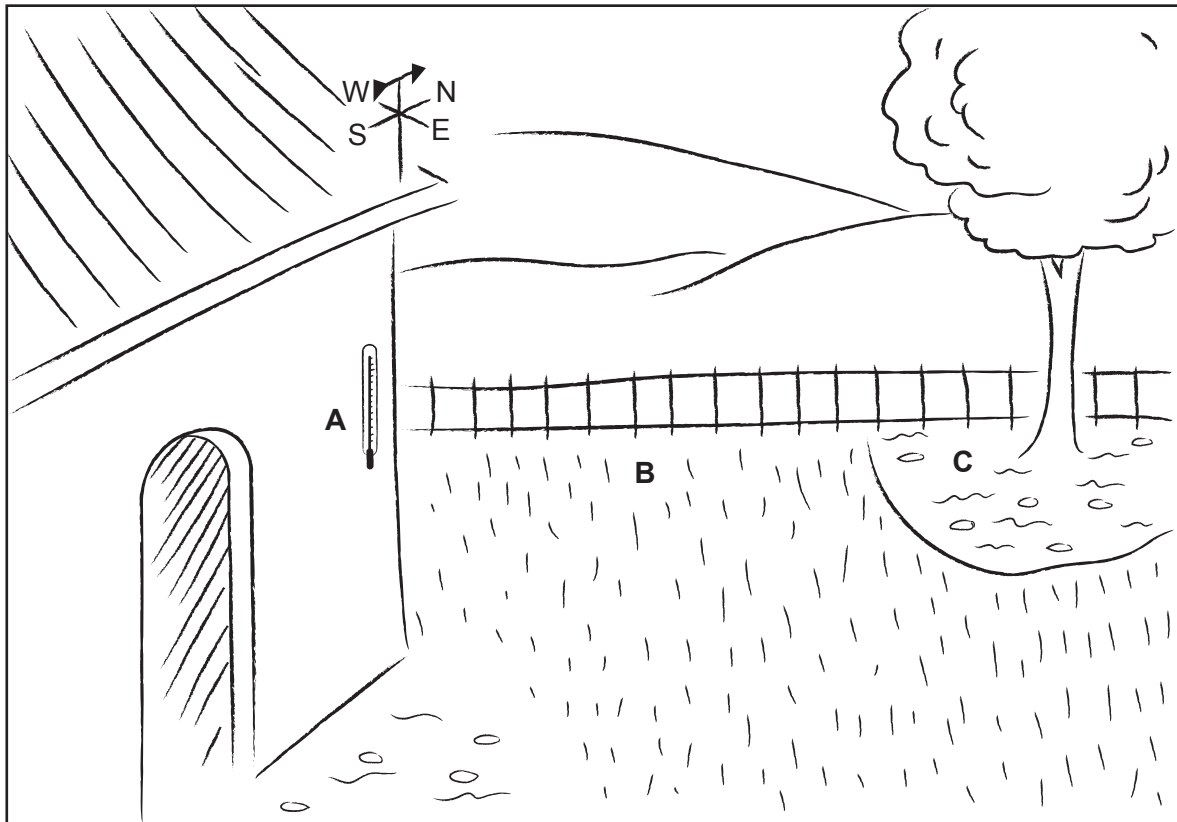
.....

.....

.....

[Total: 8 marks]

5 Study Fig. 5.1, a sketch of the site for a new weather station, at a location in the southern hemisphere.



**Key**

- ||| grass
- ~~~~ bare ground

**Fig. 5.1**

(a) The Stevenson screen will be sited at **B**. Explain why:

- the opening door will be on the south side;

.....

.....

- the box will be on 1.25 m high legs.

.....

.....

[2]

(b) From Fig. 5.1 only, suggest **two** reasons why a thermometer in the Stevenson screen at site **B** would have a lower reading than one sited on the wall at **A**.

.....  
.....  
.....  
..... [2]

(c) Suggest why the readings from a rain gauge sited at **C** would be unreliable.

.....  
.....  
.....  
..... [2]

(d) Give **one** advantage and **one** disadvantage of the site of the wind vane.

Advantage .....

.....

Disadvantage.....

..... [2]

[Total: 8 marks]

6 (a) What is the meaning of the following terms:

- secondary industry;

.....  
 .....

- assembly industry?

.....  
 ..... [2]

(b) Study Fig. 6.1, which shows the location of towns **A**, **B** and **D** and rural area **C**. A new factory is to be built for an assembly industry which uses inputs from each of these areas.

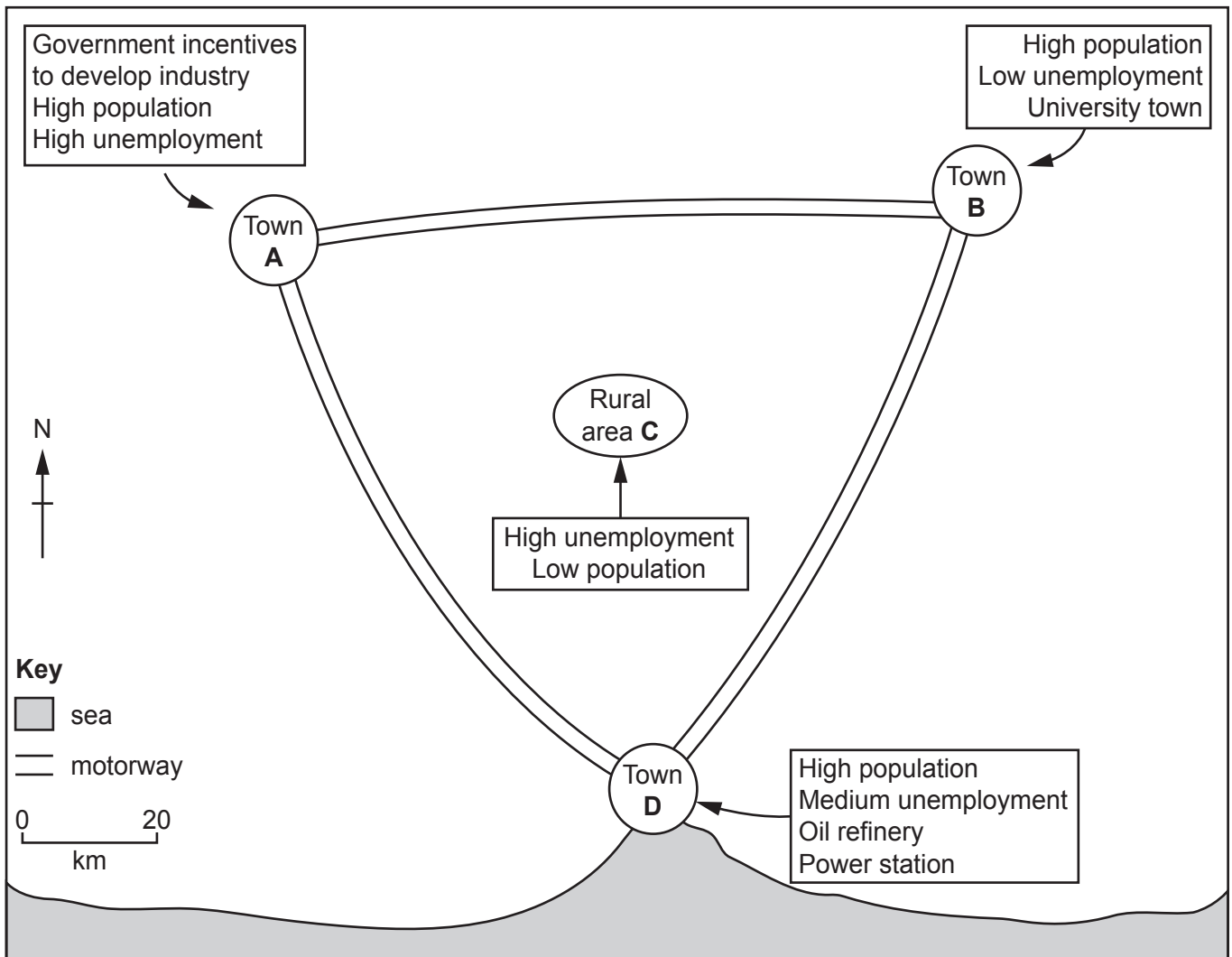


Fig. 6.1

(i) Which location would be best for easy exporting of the finished product?

..... [1]

(ii) In which location would it be easiest to find labour?

.....[1]

(c) (i) Suggest an advantage of locating a factory in a rural area such as **C**.

.....  
.....[1]

(ii) Suggest **three** disadvantages of locating a factory at **C** compared to locating at the other sites.

.....  
.....  
.....  
.....  
.....  
.....  
.....[3]

[Total: 8 marks]

## Section B

Answer **one** question from this section.

- 7 Students in Bangkok, Thailand investigated differences between two shopping centres in the north of the city. Central Ladprao Plaza is a larger shopping centre than La Villa and they are about 5 km apart. One group of students wanted to find out if there were differences between the shops and services in the two centres, and the different reasons people went to them.

They decided to test the following hypotheses:

**Hypothesis 1:** *There are differences between the numbers of high-, middle- and low-order shops and services in Central Ladprao Plaza and in La Villa.*

**Hypothesis 2:** *The main reasons for people going to shop in Central Ladprao Plaza and La Villa vary in importance.*

- (a) Before they began their fieldwork the class of students made a summary table of the differences between high-, middle- and low-order goods and services. This is shown in Fig. 7.1 below.

**Complete Fig. 7.1** to show the differences between high- and low-order goods and services.

[3]

### Goods and services

Order	How often they are bought	Average price of goods	Distance people are willing to travel	Examples of goods and services
High	..... .....	..... .....	..... .....	jewellery 'designer' fashions
Middle	moderate frequency	moderate price	medium distance	clothes shoes
Low	..... .....	..... .....	..... .....	food hairdressers

Fig. 7.1

- (b) To investigate **Hypothesis 1** the students did fieldwork in the two shopping centres. One student's fieldwork notes describe their method in Fig. 7.2 below.

### Extract from a student's fieldwork notes

Method

My group got a map which showed the different shops in Central Ladprao Plaza. We walked round the shopping centre and checked that the shops were still the same as on the map. We then used a tally chart and classified the shops as high-, middle- or low-order. We then went to La Villa and walked round the shopping centre classifying the shops on a tally chart in the same way.

Fig. 7.2



(c) To get some information to test **Hypothesis 2: *The main reasons for people going to shop in Central Ladprao Plaza and La Villa vary in importance***, the students used a questionnaire with people in the two shopping centres. This questionnaire is shown in Fig. 7.4 (Insert).

(i) The students and teacher agreed the questions they would use in the questionnaire. Suggest **three** pieces of advice their teacher gave them about using the questionnaire with people who are shopping.

1 .....

.....

2 .....

.....

3 .....

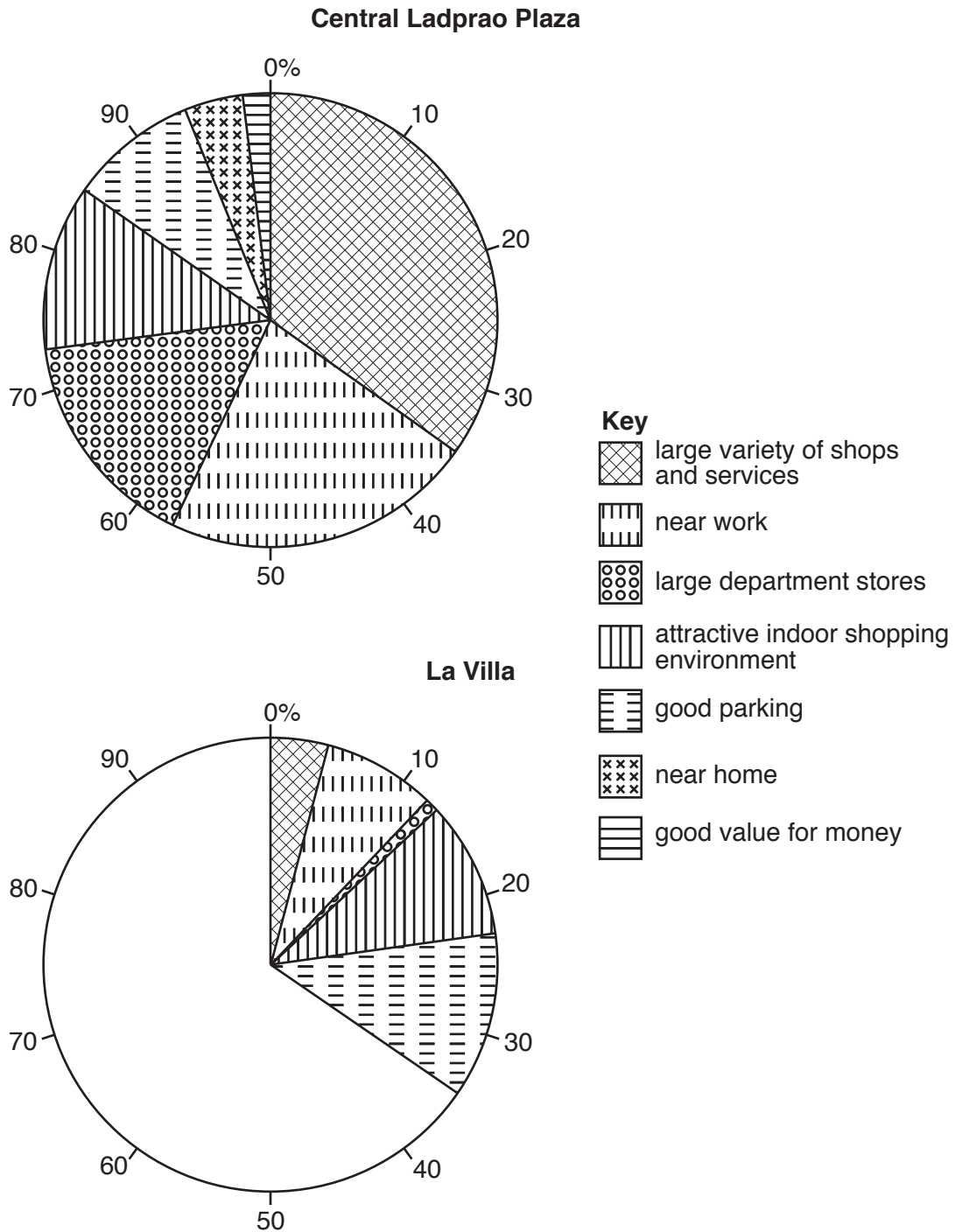
.....[3]



(ii) Table 7.2 (Insert) shows the results of Question 1 in the questionnaire.

Use the results from Table 7.2 to complete the pie graph for La Villa in Fig. 7.5 below. [2]

**Answers to Question 1 in the questionnaire:  
What is the main reason you are shopping here today?**



**Fig. 7.5**

(iii) What conclusion would the students make about **Hypothesis 2: *The main reasons for people going to shop in Central Ladprao Plaza and La Villa vary in importance?*** Use evidence from Fig. 7.5 and Table 7.2 to support your answer.

.....

.....

.....

.....

.....

.....

.....

.....

.....[4]

(d) One student used the answers to Question 2 in the questionnaire (*How did you travel here today?*) to plot the graphs in Fig. 7.6 opposite.

(i) Use the results shown in Table 7.3 (Insert) to **plot the number of people** who went to La Villa by car in Fig. 7.6 opposite. [1]

(ii) Using Table 7.3 and Fig. 7.6, identify **two** differences between the methods of travel used to go to the two shopping centres.

1 .....

.....

2 .....

.....[2]

(iii) Suggest **three** factors which may affect people’s method of travel to the shopping centres.

1 .....

.....

2 .....

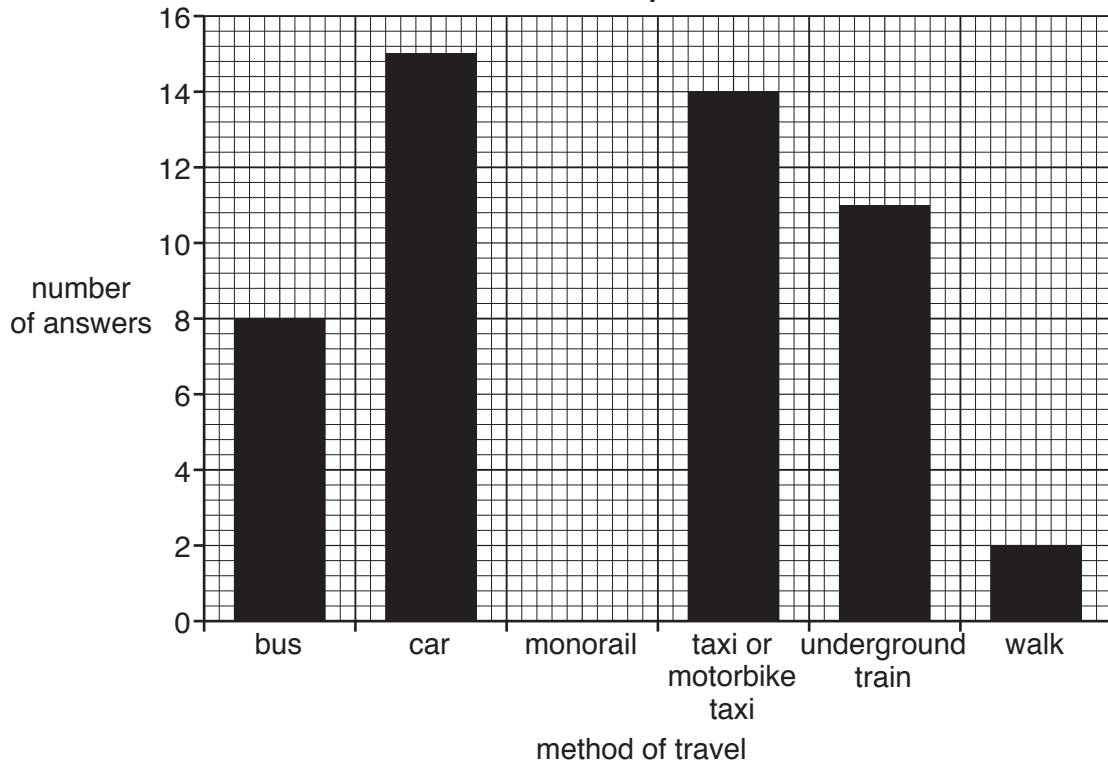
.....

3 .....

.....[3]

Methods of travel to the shopping centres

Central Ladprao Plaza



La Villa

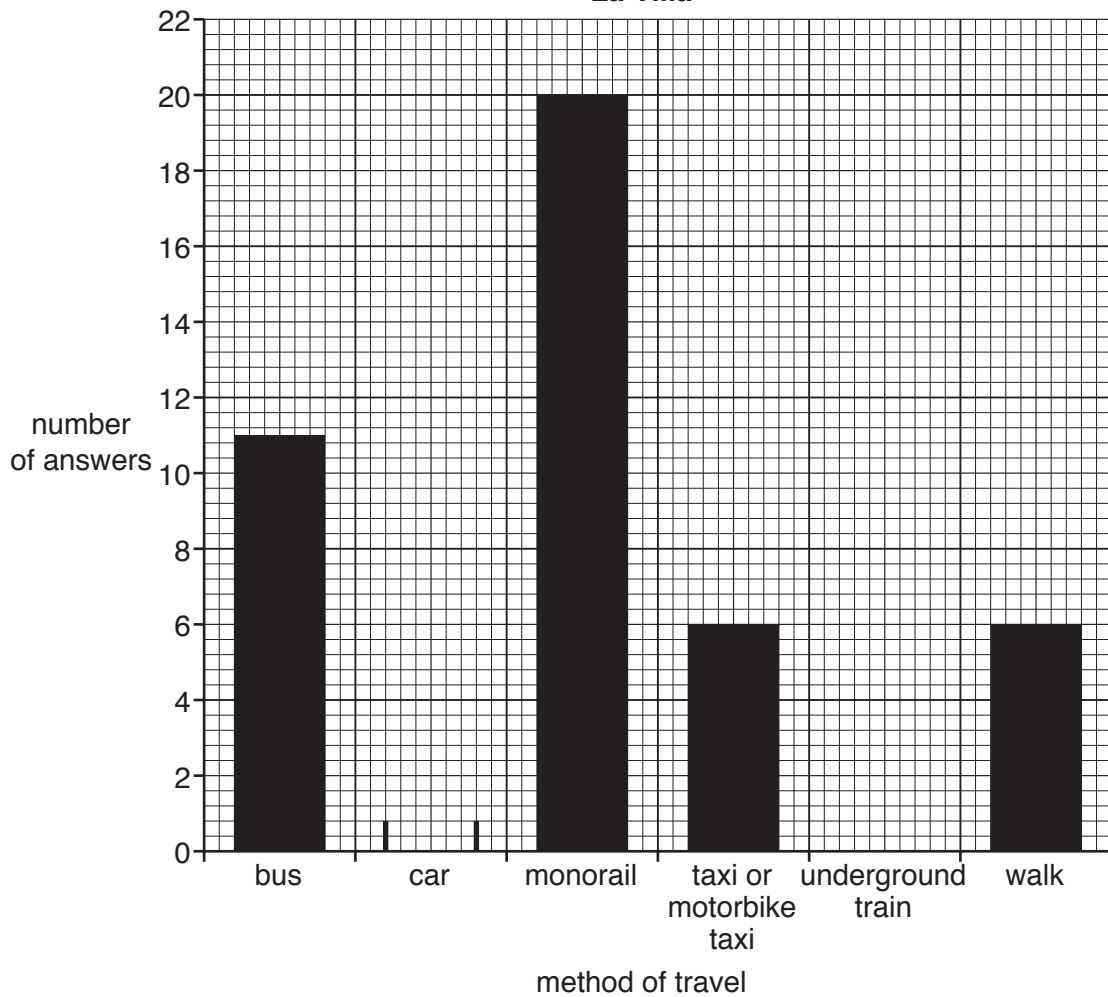


Fig. 7.6

2217/22/M/J/18

(e) Another group of students investigated the spheres of influence of the shopping centres.

(i) Which **one** of the following is the correct definition of *sphere of influence*?  
Tick (✓) your choice in the table below.

Definition	Tick (✓)
area surrounding a town or city	
area served by a town or service	
area where people have migrated from	
area next to the CBD	
area where people go to work	

[1]

(ii) Describe how the students could use the answers to Questions 3 and 4 in the questionnaire (Fig. 7.4 Insert) to investigate the spheres of influence of the two shopping centres.

.....

.....

.....

.....

.....

.....

.....

.....

.....

.....[4]

[Total: 30]

8 Students at a school in England did fieldwork on a local river. They wanted to investigate how the river changed downstream.

(a) Before splitting up into separate groups the whole class of students did a pilot study at one site.

Identify **two** advantages of doing a pilot study from the table below. Tick (✓) your choices.

	Tick (✓)
look at different features along the river	
draw a map of the course of the river	
learn how to work safely in the river	
practise fieldwork techniques	
get to know other students before they begin fieldwork	

[2]

Two groups of students worked separately to investigate the following hypotheses:

**Hypothesis 1:** *The river gradient becomes steeper downstream.*

**Hypothesis 2:** *The size of pebbles on the river bed becomes smaller downstream.*

(b) (i) To investigate **Hypothesis 1** the students measured the gradient of the river bed over 10m at five fieldwork sites. Describe a method to do this. Refer to the equipment they would use in your answer.

.....

.....

.....

.....

.....

.....

.....

.....

.....

.....

.....

.....[5]

- (ii) One group of students (group A) made one measurement at each site and the other group (group B) made four measurements. Explain why the results of group B should be more reliable.

.....

.....


.....

.....[2]

- (c) The results of the measurements made by group B at each site are shown in Table 8.1 below.

**Table 8.1**

**Measurements of angle of gradient made by group B**

Site		Angle of gradient (°) measured over 10 m				
		Measurement 1	Measurement 2	Measurement 3	Measurement 4	Average angle (°)
1	upstream  downstream	11	14	7	5	9
2		6	7	9	7	7
3		3	6	5	2	4
4		10	3	8	6	7
5		4	11	5	4	6

Note - average figures given to the nearest whole number

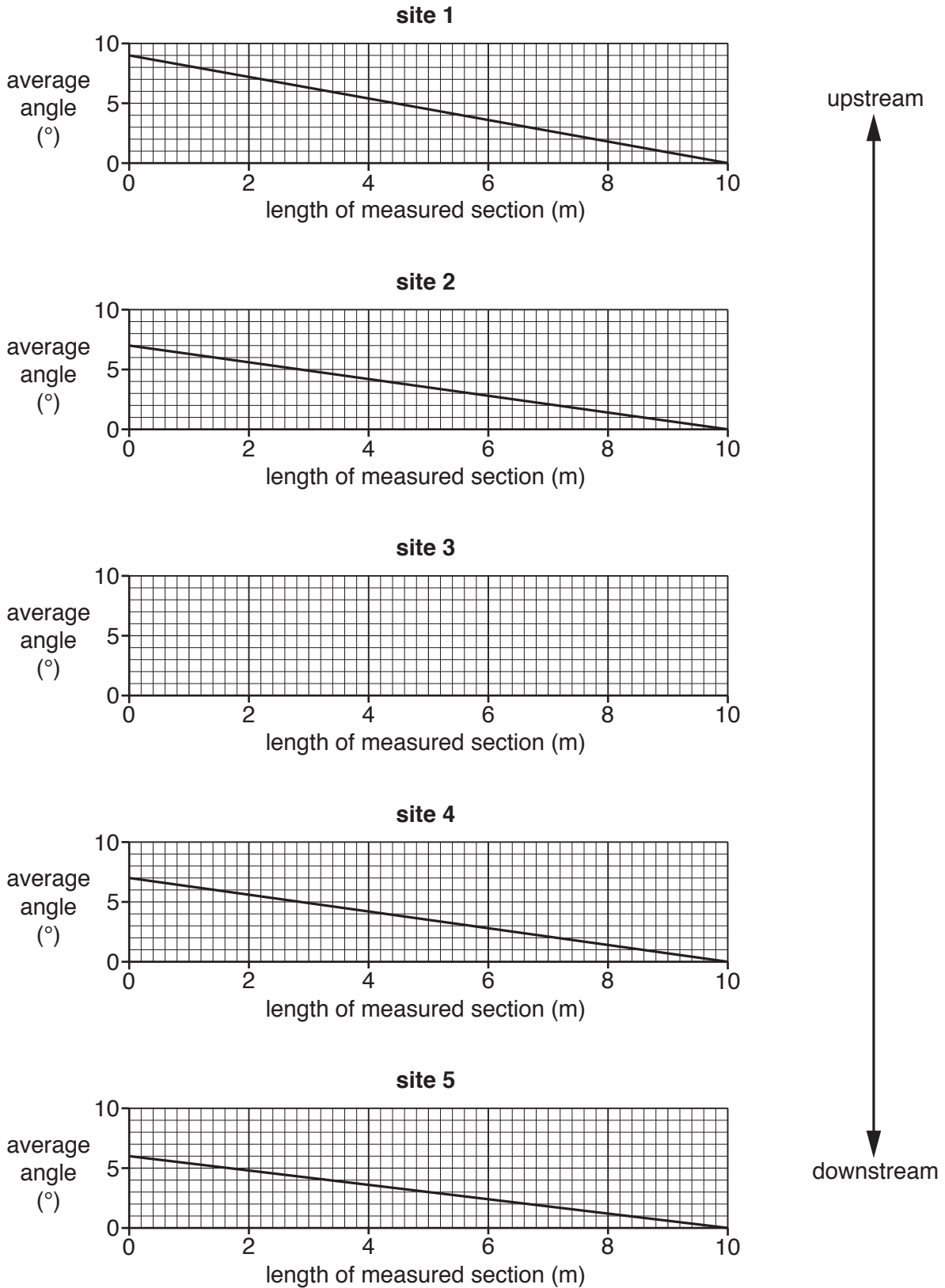
- (i) At which site (1 to 5) is the largest variation in measurements?

Site .....

[1]

- (ii) Fig. 8.1 below shows a method chosen by one student to present the results in Table 8.1. Use this method to show the average gradient at site 3. [1]

**Average angle of gradient at each site**



**Fig. 8.1**

(iii) What conclusion would the students make about **Hypothesis 1**: *The river gradient becomes steeper downstream*? Support your answer with data from Fig. 8.1 and Table 8.1.

.....  
 .....  
 .....  
 .....  
 .....  
 .....[3]

(d) To investigate **Hypothesis 2**: *The size of pebbles on the river bed becomes smaller downstream*, the students in group A selected 10 pebbles at random from the bed of the river at each site.

(i) Suggest **two** weaknesses of selecting pebbles at random.

1 .....  
 .....  
 2 .....  
 .....[2]

(ii) The students in group B collected their sample of 10 pebbles at equal distances across the river bed. Which **one** of the following describes this method of sampling? Tick (✓) your answer.

	Tick (✓)
average	
balanced	
biased	
stratified	
systematic	

[1]



- (iii) Using a ruler the students then measured the length of the pebbles. The measurements of the pebbles collected by group B at site 2 are shown in Table 8.2 (Insert).

Plot on Fig. 8.2 below the length of pebble number 3 and the average length of the pebbles at site 2. [2]

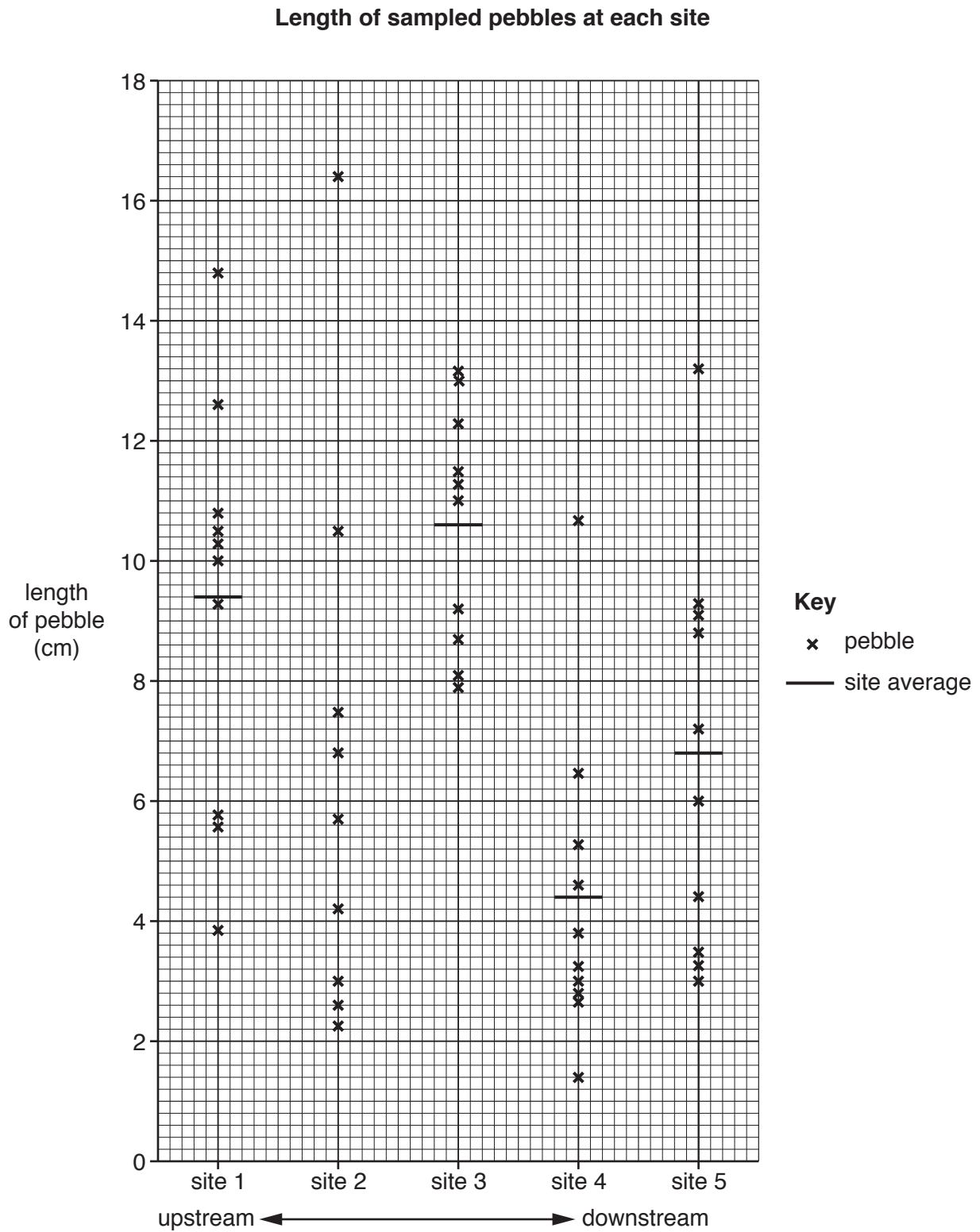


Fig. 8.2

- (iv) The students decided that **Hypothesis 2: *The size of pebbles on the river bed becomes smaller downstream***, was **partly true**. Use evidence from Fig. 8.2 to explain why they reached this conclusion.

.....

.....

.....

.....

.....

.....

.....[3]

- (v) Explain why pebbles generally become smaller downstream. Refer to processes of erosion.

.....

.....

.....

.....

.....

.....

.....[3]

- (e) Whilst the two groups of students worked on Hypotheses 1 and 2, other students investigated how other characteristics of the river changed downstream.

- (i) Suggest a suitable hypothesis to investigate. Do **not** choose gradient or pebble size.

.....

.....[1]

(ii) Describe a method to investigate your hypothesis at the five fieldwork sites.

.....

.....

.....

.....

.....

.....

.....

.....

.....

.....

.....

.....

.....

[4]

[Total: 30]

**Additional Pages**

If you use the following lined pages to complete the answer(s) to any question(s), the question number(s) must be clearly shown.

Lined area for writing answers, consisting of multiple horizontal dotted lines.







**BLANK PAGE**

---

Permission to reproduce items where third-party owned material protected by copyright is included has been sought and cleared where possible. Every reasonable effort has been made by the publisher (UCLES) to trace copyright holders, but if any items requiring clearance have unwittingly been included, the publisher will be pleased to make amends at the earliest possible opportunity.

To avoid the issue of disclosure of answer-related information to candidates, all copyright acknowledgements are reproduced online in the Cambridge International Examinations Copyright Acknowledgements Booklet. This is produced for each series of examinations and is freely available to download at [www.cie.org.uk](http://www.cie.org.uk) after the live examination series.

Cambridge International Examinations is part of the Cambridge Assessment Group. Cambridge Assessment is the brand name of University of Cambridge Local Examinations Syndicate (UCLES), which is itself a department of the University of Cambridge.